



General Certificate of Secondary Education  
November 2022

Centre Number

--	--	--	--	--

Candidate Number

--	--	--	--	--

# Mathematics

Unit M6 Paper 2  
(With calculator)  
Foundation Tier



[GMC62]

\*GMC62\*

**THURSDAY 1 DECEMBER, 10.45am–11.45am**

## TIME

1 hour.

## INSTRUCTIONS TO CANDIDATES

Write your Centre Number and Candidate Number in the spaces provided at the top of this page. **You are provided with Foundation Tier Additional Support Materials for use with this paper.**

**You must answer the questions in the spaces provided.**

**Do not write outside the boxed area on each page, on blank pages or tracing paper.**

Complete in black ink only. **Do not write with a gel pen.**

Answer **all sixteen** questions.

All working should be clearly shown in the spaces provided. Marks may be awarded for partially correct solutions.

You **may** use a calculator for this paper.

## INFORMATION FOR CANDIDATES

The total mark for this paper is 50.

Figures in brackets printed down the right-hand side of pages indicate the marks awarded to each question or part question.

You should have a calculator, ruler, compasses and a protractor.

The Formula Sheet is on page 2.

13337



\*24GMC6201\*

# Formula Sheet

$$\text{Area of trapezium} = \frac{1}{2}(a + b)h$$



$$\text{Volume of prism} = \text{area of cross section} \times \text{length}$$



1

SET A

2

4

6

SET B

1

3

5

A card is taken at random from Set A.

A card is then taken at random from Set B.

The cards are used to make a two-digit number in the order AB.

(a) Write down the 9 possible two-digit numbers.

\_\_\_\_\_, \_\_\_\_\_, \_\_\_\_\_, \_\_\_\_\_, \_\_\_\_\_, \_\_\_\_\_, \_\_\_\_\_, \_\_\_\_\_, \_\_\_\_\_

[2]

(b) What is the probability that the two-digit number

(i) is even,

Answer \_\_\_\_\_ [1]

(ii) is a multiple of 3?

Answer \_\_\_\_\_ [1]

[Turn over



2 (a) Complete

1 kg is approximately equal to \_\_\_\_\_ lbs

[1]

(b) An airline has a strict carry-on case weight limit of 23 lbs.

Sonya's case weighs 12 kg.

Will she be allowed to carry it on board? Give a reason.

**Show your working clearly.**



Answer \_\_\_\_\_ because \_\_\_\_\_ [2]





**BLANK PAGE**  
**DO NOT WRITE ON THIS PAGE**  
**(Questions continue overleaf)**

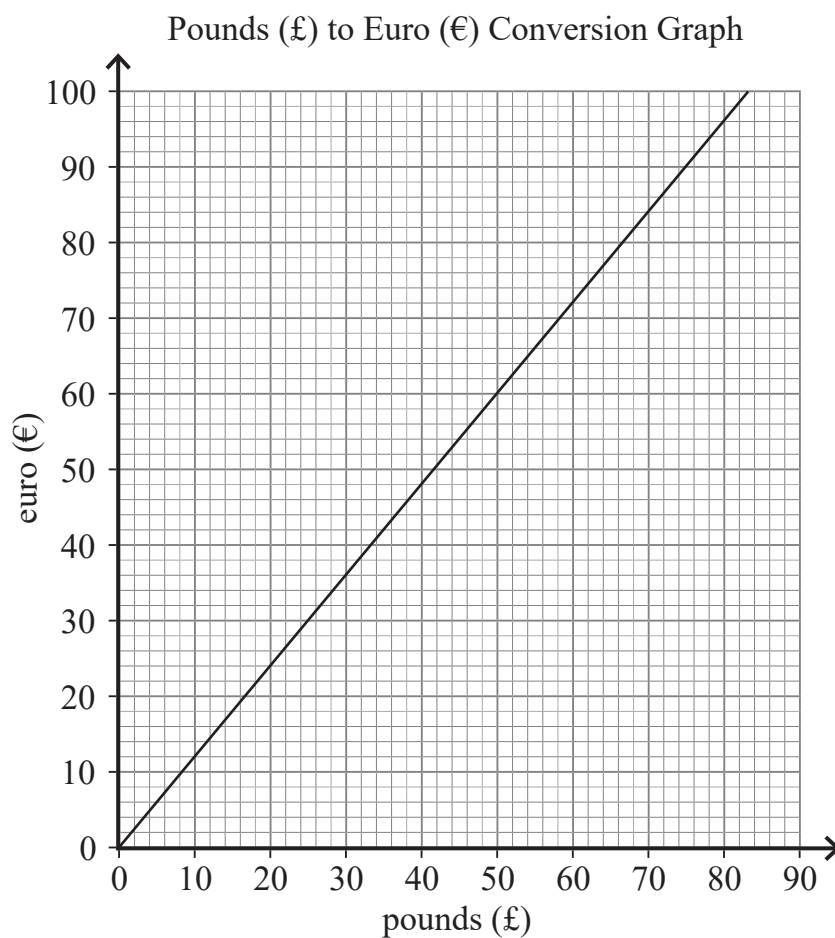
**[Turn over**

13337



\*24GMC6205\*

3 You can use the graph below to change between pounds (£) and euro (€).



(a) Change £70 into euro (€).

Answer € \_\_\_\_\_ [1]



(b) Bev buys a laptop for €420

How much is this in pounds (£)?

**Show your method clearly.**

Answer £ \_\_\_\_\_ [2]



4 Sue works in a hotel.

She needs to buy 100 napkins for a party.

Which of these companies, Table Dressing or Party Party, is cheaper and by how much for 100 napkins?


### Table Dressing

Pack of 20 Napkins  
£2.65



### Party Party

Pack of 25 Napkins  
£3.40



Answer \_\_\_\_\_ is cheaper by \_\_\_\_\_ [3]



- 5 In a group, the number of boys and girls with a certain eye colour is recorded as shown below.

	Boys	Girls
Brown eyes	10	8
Blue eyes	4	7
Green eyes	6	5

A child is chosen at random from this group of boys and girls.

What is the probability that the child is a girl with blue eyes?

Answer \_\_\_\_\_ [2]



6 Ticket prices for adults and children are shown for two rugby clubs.

Ulster	Clermont
Adults: £29 each	Adults: €32.50 each
Children: £14.95 each	Children: €17 each

The exchange rate is €1 = £0.83

At which rugby club is it more expensive to buy tickets for 2 adults and 1 child and how much more expensive is it?

State units with your answer.

Answer \_\_\_\_\_ is more expensive by \_\_\_\_\_ [4]



7 (a) The school is West of the church.

Complete the sentence by filling in the correct direction.

The church is \_\_\_\_\_ of the school. [1]


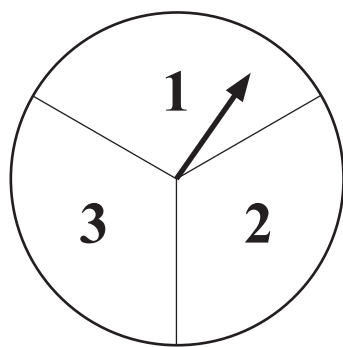
(b) The shop is North East of the station.

Complete the sentence by filling in the correct direction.

The station is \_\_\_\_\_ of the shop. [1]

[Turn over





The fair spinner shown is spun and a fair dice is thrown.

The number the spinner lands on is added to the number on the dice to give a total score.

(a) Complete the table of total scores.

		Dice					
		1	2	3	4	5	6
Spinner	1	2	3	4	5		
	2	3	4	5			
	3	4	5				

[2]

(b) What is the probability of a total score of 4?

Answer \_\_\_\_\_ [1]

(c) What is the probability of a total score **greater than or equal to 5**?

Answer \_\_\_\_\_ [1]





© Getty Images

When Susan goes to the cinema, she always buys only one item.

She buys a drink or popcorn or crisps or ice cream.

Some of the probabilities are shown.

Item	Probability
A drink	0.4
Popcorn	0.15
Crisps	
Ice cream	0.2

(a) Work out the probability that Susan buys crisps.

Answer \_\_\_\_\_ [2]

(b) Susan goes to the cinema 20 times.

Calculate how many times you would expect her to buy a drink.

Answer \_\_\_\_\_ [2]

[Turn over



10 Adam, Bob and Carol play a coin game.

Two fair coins are tossed.

Adam wins if there are no heads shown.

Bob wins if there is one head shown.

Carol wins if there are two heads shown.

Is the game fair to all players? Calculate who is most likely to win.



© Getty Images

[2]





**BLANK PAGE**  
**DO NOT WRITE ON THIS PAGE**  
**(Questions continue overleaf)**

**[Turn over**

13337



**\*24GMC6215\***

11 Avril's recipe makes 16 tray bakes with the following ingredients.

<b>Chocolate tray bakes</b>	<b>(to make 16 tray bakes)</b>
crushed biscuits	240 g
butter	200 g
brown sugar	150 g
chocolate	240 g
condensed milk	400 g

Avril has 250 g of butter to make chocolate tray bakes.

She has enough of the other ingredients.

(a) How many tray bakes can she make?

Answer \_\_\_\_\_ [1]



(b) Complete the amounts needed for the other ingredients.

crushed biscuits \_\_\_\_\_ g

butter 250 g

brown sugar \_\_\_\_\_ g

chocolate \_\_\_\_\_ g

condensed milk \_\_\_\_\_ g

[3]

[Turn over

13337



\*24GMC6217\*

12 Orange juice is mixed with water in the ratio 1:11 (orange juice:water).

How much orange juice and how much water make up 3 litres in total?

Give your answers in ml.

Answer Orange juice \_\_\_\_\_ ml

Water \_\_\_\_\_ ml

[3]

13 Simplify

(a)  $t^3 \times t^8$

Answer \_\_\_\_\_ [1]

(b)  $(t^2)^3$

Answer \_\_\_\_\_ [1]



14 (a) Show that  $20x - x^3 = 1$  has a solution between 4 and 5

[1]

(b) Use Trial and Improvement to find this solution correct to 1 decimal place.

Show all your working.

Answer \_\_\_\_\_ [3]

[Turn over

13337

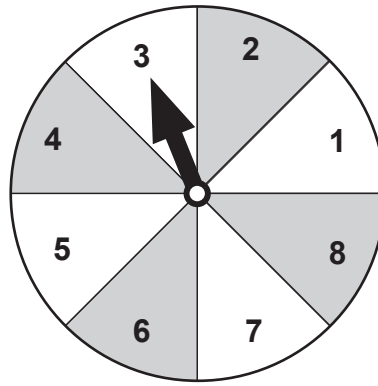


\*24GMC6219\*

15 Rearrange  $v = u + at$  to make  $a$  the subject.

Answer  $a =$  \_\_\_\_\_ [2]





The spinner is spun 1000 times.

The table shows some of the number of times it landed on the number 3 and some of the calculated relative frequency values.

Number of spins	Number of threes	Relative frequency
20	2	0.1
200	26	0.13
500	64	
1000		0.122

(a) Calculate the missing relative frequency value.

Answer \_\_\_\_\_ [1]

(b) Calculate the number of times it landed on a 3 for the 1000 spins.

Answer \_\_\_\_\_ [1]

(c) Use the best relative frequency value from the table to calculate the number of threes you would expect to get in 2500 spins.

Answer \_\_\_\_\_ [2]



---

**THIS IS THE END OF THE QUESTION PAPER**

---

**BLANK PAGE**

**DO NOT WRITE ON THIS PAGE**

13337



\*24GMC6222\*





**BLANK PAGE**  
**DO NOT WRITE ON THIS PAGE**

13337



\*24GMC6223\*

Sources: All images © CCEA unless stated

**DO NOT WRITE ON THIS PAGE**

For Examiner's use only	
Question Number	Marks
1	
2	
3	
4	
5	
6	
7	
8	
9	
10	
11	
12	
13	
14	
15	
16	

<b>Total Marks</b>	
--------------------	--

Examiner Number

Permission to reproduce all copyright material has been applied for.  
In some cases, efforts to contact copyright holders may have been unsuccessful and CCEA will be happy to rectify any omissions of acknowledgement in future if notified.

13337/6



\*24GMC6224\*



*Rewarding Learning*

**General Certificate of Secondary Education  
November 2022**

---

## **GCSE Mathematics**

---

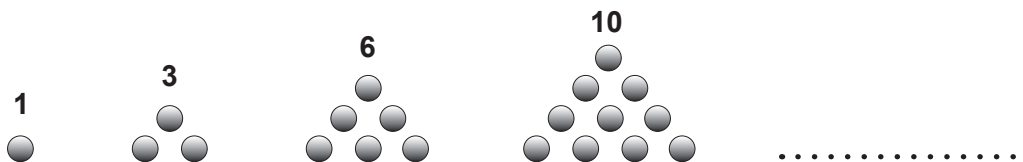
# **FOUNDATION TIER ADDITIONAL SUPPORT MATERIALS (For use in November 2022)**

# FOUNDATION TIER ADDITIONAL SUPPORT MATERIALS (November 2022)

## Numbers

Highest Common Factor (HCF): The highest common factor is the largest number that divides evenly into two or more numbers, e.g. 4 is the HCF of 8 and 20

Triangular numbers – are a pattern of numbers which form triangles. Each number in the sequence adds a new row of dots to the triangle.



## Trial and Improvement

This is a method of trying different values in an equation until you get a suitable solution (e.g. to 1 decimal place).

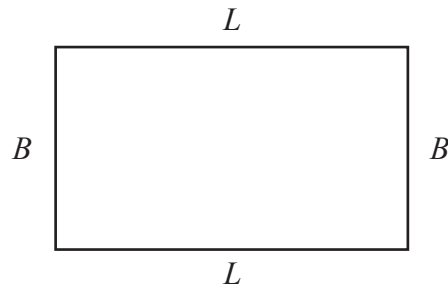
## Range

The range of a set of data is the difference between the largest value and the smallest value in the data set.

## Mean

The mean of a set of data is the sum of all the data values divided by the number of data values.

## Area and Volume



The area of a rectangle is found by multiplying the length of the rectangle by the breadth.

$A = L \times B$  where  $A$  is area,  $L$  is length and  $B$  is breadth.

The area of a triangle is found by multiplying half the length of the base by the perpendicular height of the triangle.

$A = \frac{1}{2}bh$  where  $b$  is the base and  $h$  is the perpendicular height of the triangle.

The area of a circle is  $A = \pi r^2$  where  $r$  is the radius of the circle.

The volume of a cuboid is found by multiplying the length by the breadth by the height of the cuboid.

$V = L \times B \times H$  where  $V$  is volume,  $L$  is length,  $B$  is breadth and  $H$  is height.

## Angles

There are  $180^\circ$  on a straight line.

There are  $180^\circ$  inside a triangle.

An isosceles triangle is a triangle with 2 equal sides and 2 equal angles.

The sum of all the angles inside a polygon is given by  $180(n - 2)$  where  $n$  is the number of sides in the polygon.

## Pie Chart

In a pie chart, the total angle that corresponds to the entire data set is  $360^\circ$

## Probability

The sum of the probabilities of all outcomes equals 1

## Compound Measures

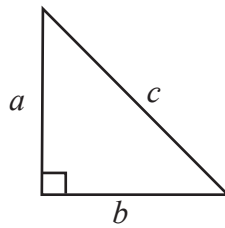
Average Speed =  $\frac{\text{Distance}}{\text{Time}}$

Density =  $\frac{\text{Mass}}{\text{Volume}}$

## Pythagoras' Theorem

If  $a$ ,  $b$  and  $c$  are the sides of a right angled triangle shown below, then

$$a^2 + b^2 = c^2$$



## Midpoint of a line

If  $(x_1, y_1)$  and  $(x_2, y_2)$  are the end points of a line, then the coordinates of the midpoint  $M$  of the line are

$$M = \left( \frac{x_1 + x_2}{2}, \frac{y_1 + y_2}{2} \right)$$